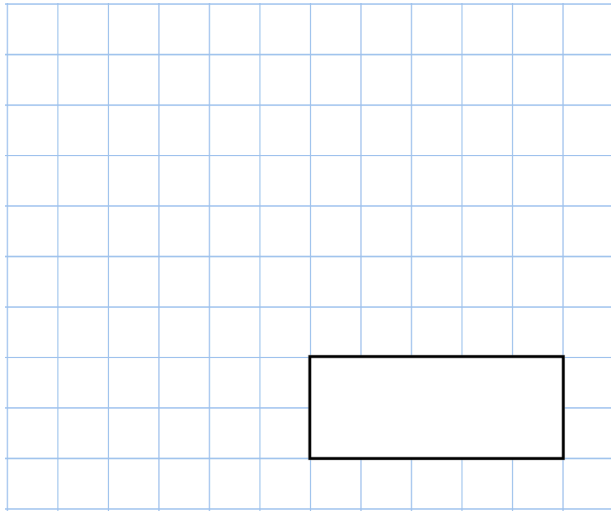


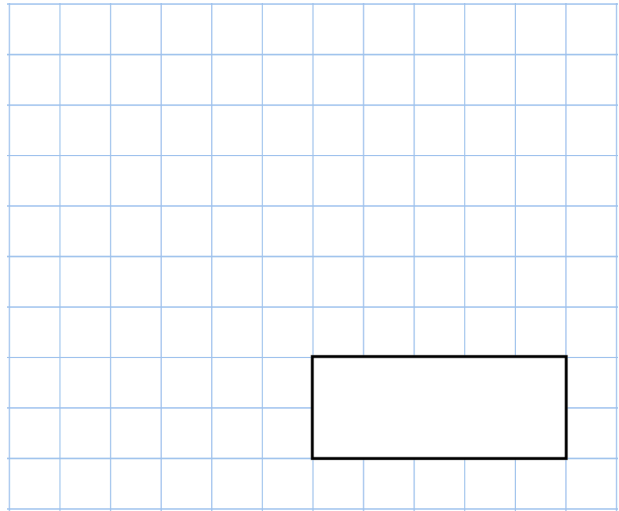


4th August


$155 - 30$



9×3

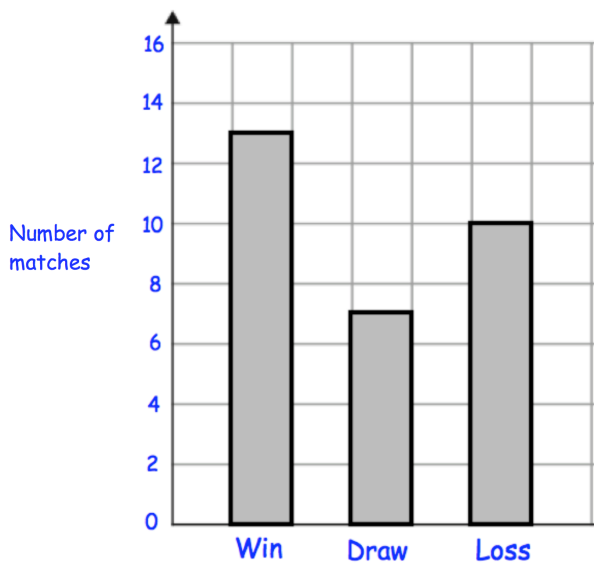


How many days are there in April?



Bolton Rovers play some football matches

The results are shown in this bar chart



How many matches did they **lose**?

How many more matches did they **win** than **draw**?



5th August


$$30 + 30 + 30 + 30$$

$$4 \overline{) 52}$$

2 apples cost the same as 1 pineapple

One apple costs 36p

How much does **one** pineapple cost?



Draw a pair of parallel lines

Match the numbers that **multiply** to give an answer of 48

2		12
6		48
3		16
1		8
4		24

Name: _____

Primary 5-a-day

Bronze




10th August

$48 - 19$

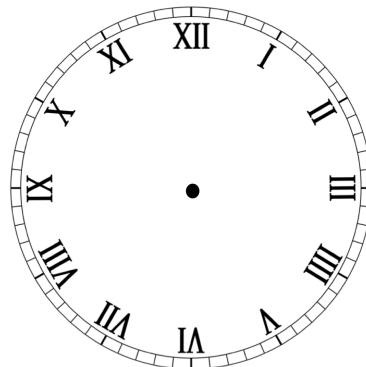
$77 + 33$

On the grid, draw a rectangle



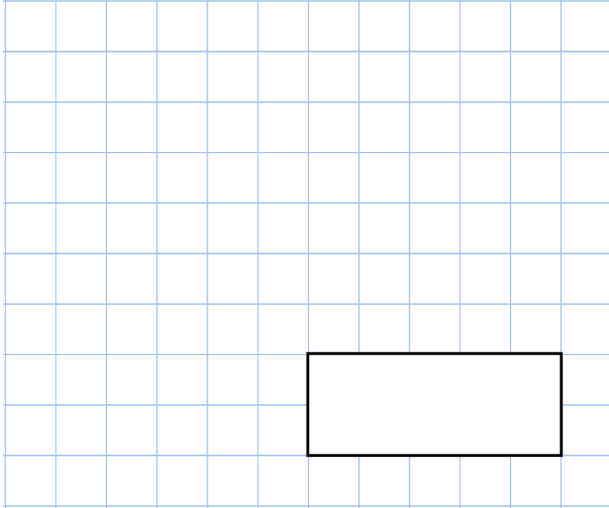
On the grid, draw a pentagon

Show 1:45 on the clock

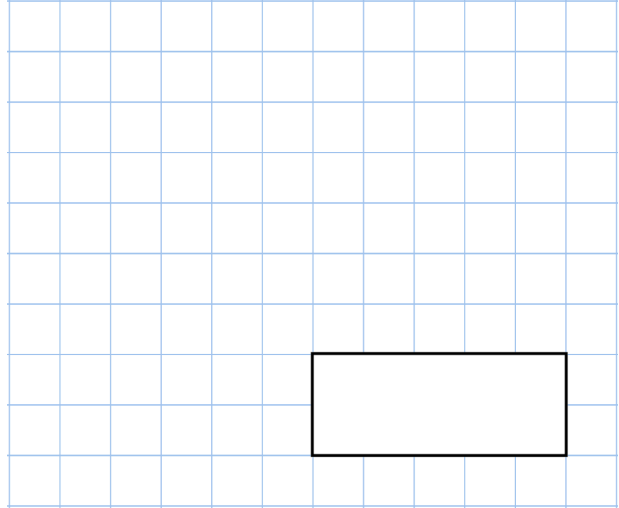



12th August

$55 + 160$

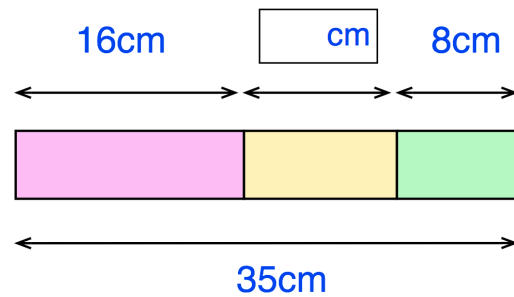


$5 \times 10 \times 3$

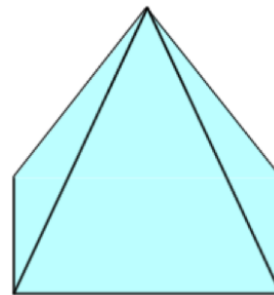


A red block, yellow block and green block are placed in a row.

Find the length of the yellow block



How many vertices does a square based pyramid have?



Find the two missing numbers

$$\begin{array}{r} 9 \square \\ - \square 5 \\ \hline 27 \end{array}$$

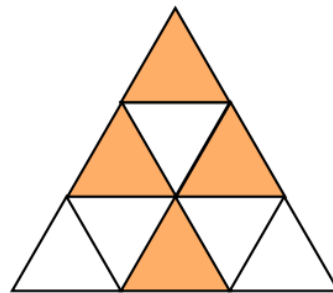


20th August

	4	9
+	2	3
	<hr/>	

3	5	4
---	---	---

What fraction of this shape is shaded?



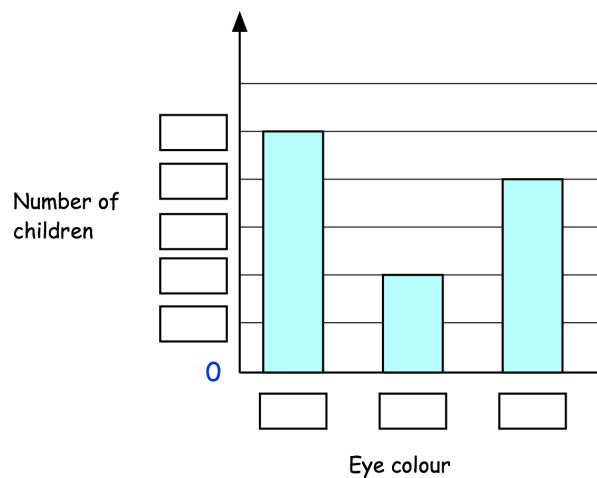
Alice collected information about her friends' eye colour.

Here are her results

Eye Colour	Number of Children
Brown	8
Blue	10
Green	4

The bar chart shows the information from the table

Fill in **all** the missing labels



**21st August**

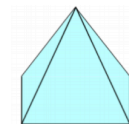
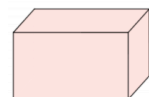
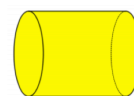
$$\begin{array}{r} 81 \\ - 39 \\ \hline \end{array}$$

$300 - 120$

Mollie has 22p
Erin has 40p

How much money should Erin give Mollie so that they have the **same amount of money**?

Two shapes have **more than 6** edges
Circle them.



Chloe is late arriving at school.
She is meant to arrive at 8:55am

The clock shows the time she arrived.

How many minutes late is she?



Name: _____

Primary 5-a-day

Bronze



23rd August

$$50 \times 50$$

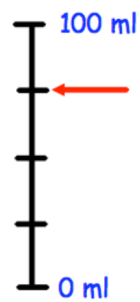
$$3 \overline{) 72}$$

395 people watched a rugby match

Write the number 395 in words

Carl is measuring how much water is in a glass.

How much water is in the glass?



Draw a hexagon

Name: _____

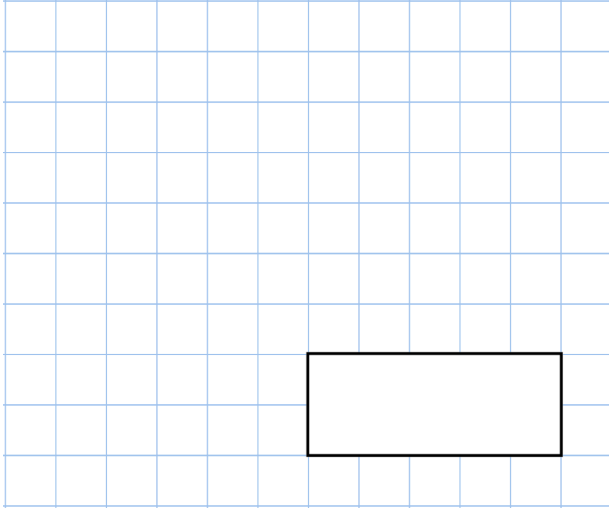
Primary 5-a-day

Bronze

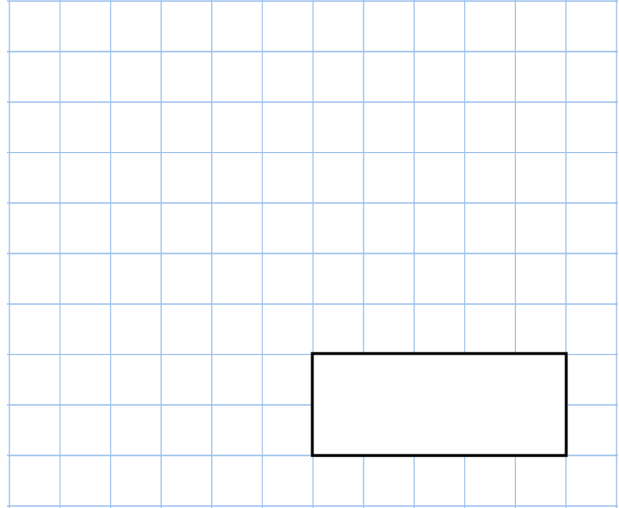


24th August

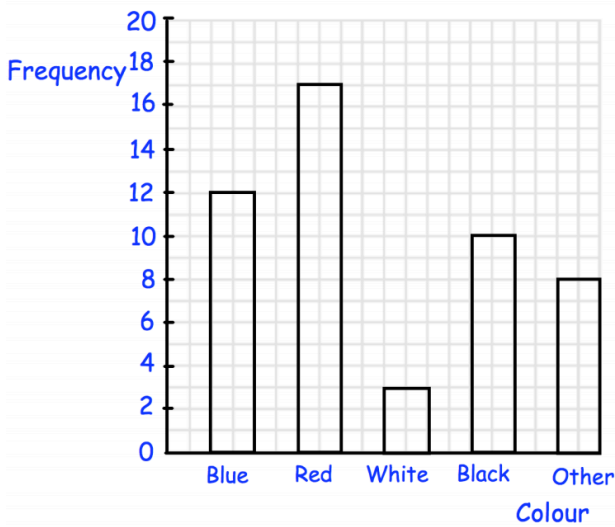
$$900 - 60$$



$$4 \times 26$$



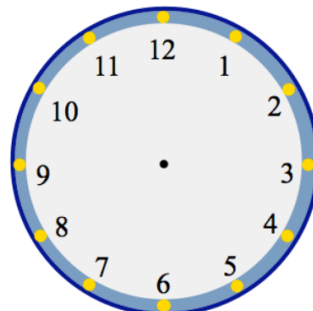
Colours of cars in the school car park



What is the most common colour of car?

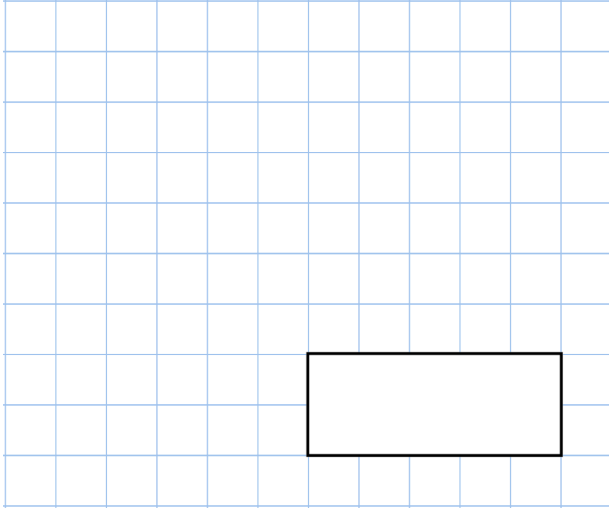
How many more cars were blue than black?

Show the time **five past two** on the clock

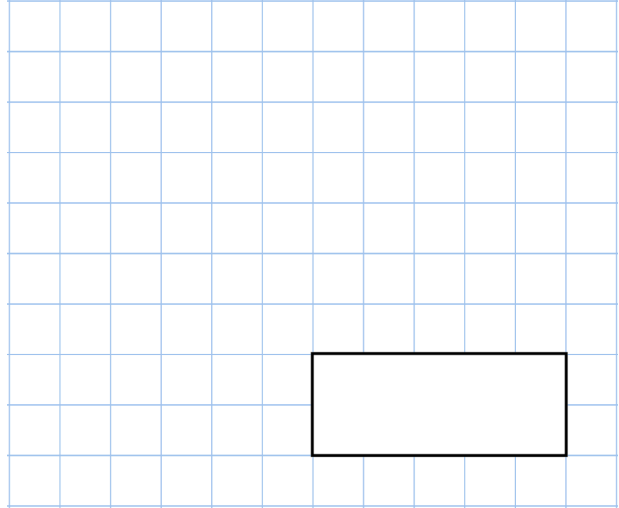


**29th August**

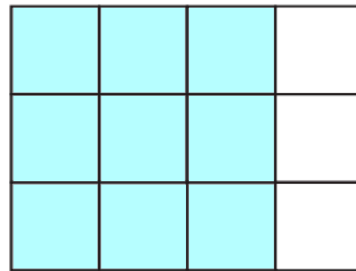
$$2 \times 2 \times 2 \times 2$$



$$265 + 45$$



What fraction of this shape is shaded?



Henry is paid £10 an hour.

In one week he is paid £160

How many hours did Henry work?

This square has some dots on its sides

Join two dots to divide the square into **two equal parts**.